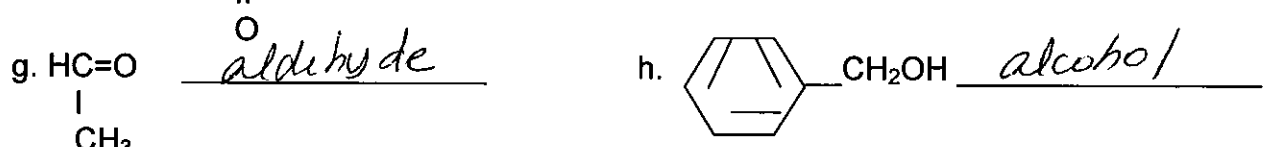
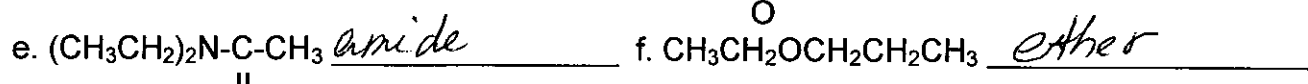
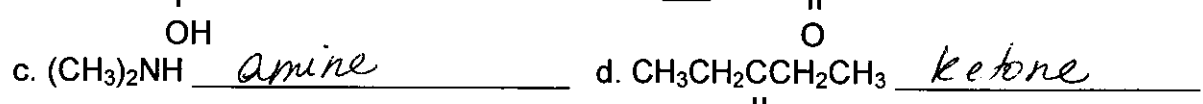
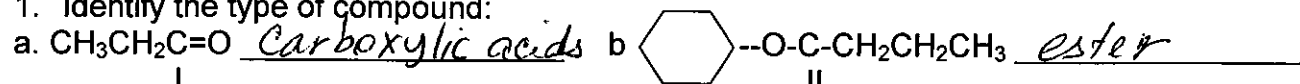
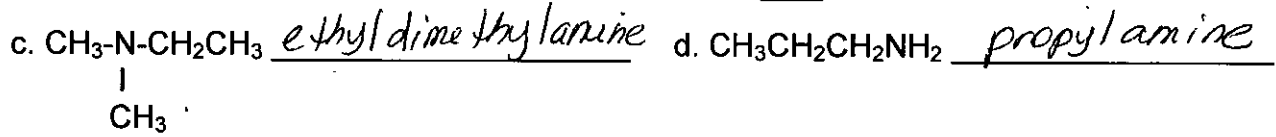


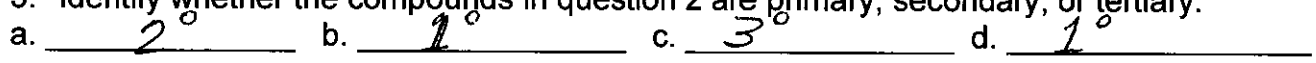
1. Identify the type of compound:



2. Name the following:



3. Identify whether the compounds in question 2 are primary, secondary, or tertiary:



4. Identify by the letter which of the compound(s) in question 1 is (are) acidic: a

5. Identify by the letter which of the compound(s) in question 1 is (are) basic: c

6. Complete each of the following reactions and provide the name of the reaction for each:

